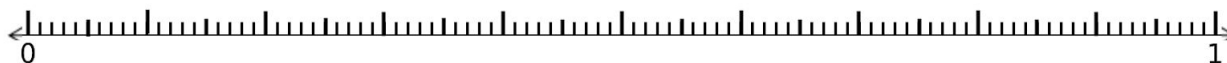





## שברים עשרוניים על ישר המספרים:

מקמו את המספרים הבאים על ישר המספרים:

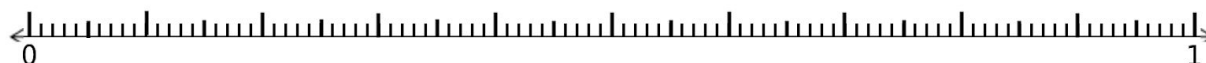
0.34 , 0.76



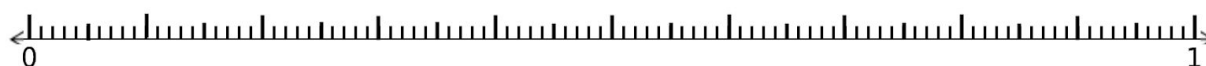
0.87 , 0.21



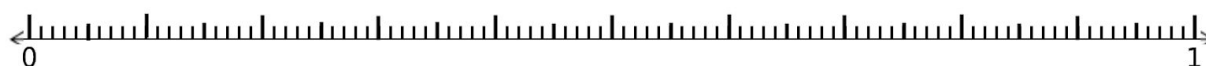
0.95 , 0.78 , 0.12



0.45 , 0.65 , 0.34

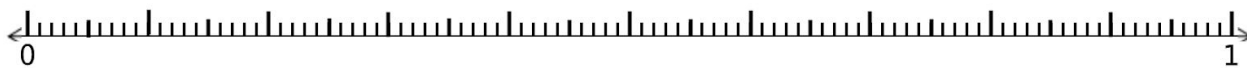


0.21 , 0.81 , 0.43

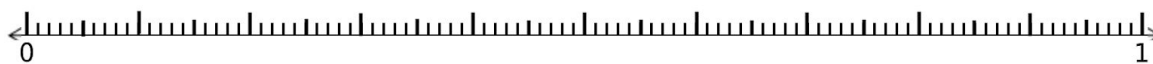




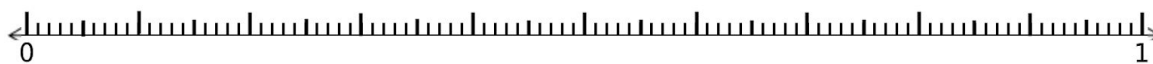
0.34 , 0.95 , 0.43




0.87 , 0.21




0.95 , 0.78 , 0.12



0.45 , 0.65 , 0.34



0.21 , 0.81 , 0.43



0.21 , 0.81 , 0.43

